

Adım Soyadım:

Sınıfım:

Numaram:

## GEOMETRİK CİSİMLER

✏ Aşağıdaki görsellerin altlarındaki kutulara köşesi olanlara tik işareti, köşesi olmayanlara ise çarpı işareti koyunuz.

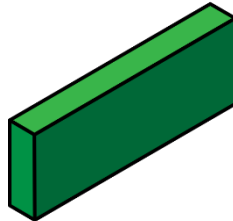

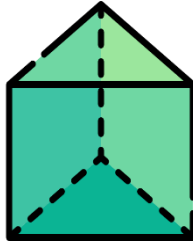





Adım Soyadım:

Sınıfım:

Numaram:

## GEOMETRİK CİSİMLER

Yandaki görselleri ortadaki geometrik cisimlere benzeyenlerle eşleştiriniz.

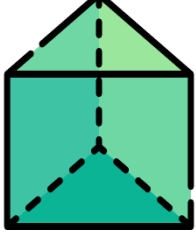


Adım Soyadım:





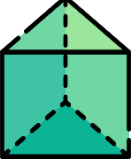
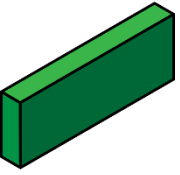
Sınıfım:

Numaram:

## GEOMETRİK CİSİMLER

					
Küp	Küre	Silindir	Kare Prizma	Üçgen Prizma	Dikdörtgen Prizma

 Aşağıdaki geometrik cisimlerin yanlarına günlük hayatlardan örnekler yazınız.

Adım Soyadım:

Sınıfım:

Numaram:

## GEOMETRİK CİSİMLER

✏️ Aşağıdaki görsellerin hangi geometrik cisimlere benzediklerini altlarına yazınız.

